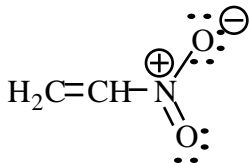
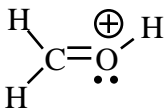
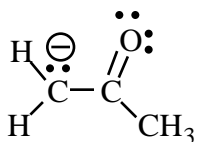


**Chemistry 2521, Fall Semester 2001**  
**Sample Midterm 1 Exam**  
 (Chapters 1, 2, 3 of Brown & Foote text)

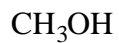
This exam has 9 problems on 4 pages. Make sure your copy is complete and correct.  
*Answer key is available in PDF format at: [www.d.umn.edu/~vzhdanki/2521/](http://www.d.umn.edu/~vzhdanki/2521/)*

Printed Name \_\_\_\_\_

1. (12; 4 pts each) Draw reasonable **resonance contributors** for each of the following species. Label which resonance contributor(s) is **major** and which **minor**.

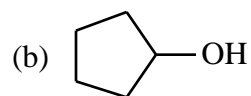
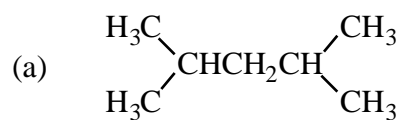


2. (12; 4 pts each) Draw each of the following molecules in **three dimensions**. Show the direction of a **dipole moment** for each molecule.



3. (10) Draw a **three-dimensional** representation of formaldehyde,  $\text{H}_2\text{C}=\text{O}$ . Show the **shape** of the  $\pi$ -**orbital** and indicate **hybridization of carbon and oxygen atoms** on this picture. (You don't need to show the shape of  $\sigma$ -orbitals on your drawings).

4. (10; 2 pts each) Give either the IUPAC name or the correct structure for each of the following compounds.



(c) *trans*-1,3-dimethylcyclopentane

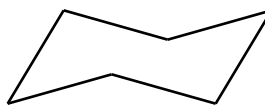
(d) 4-isopropyloctane

(e) 1,2-*cis*-diethylcyclobutane

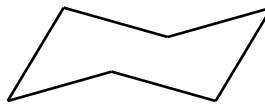
5. (5 pts) Draw a **Newman projection** of the most stable staggered conformation of 1,2-dichloroethane,  $\text{ClCH}_2\text{CH}_2\text{Cl}$ .

6. (15; 5 pts each) Make a three dimensional drawing of the **most stable** chair **conformation** for each of the following compounds. (Use the provided template; make sure to show **correct axial or equatorial** bonds to the substituents):

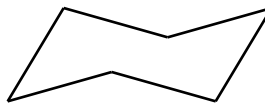
(a) *cis*-1,3-dimethylcyclohexane



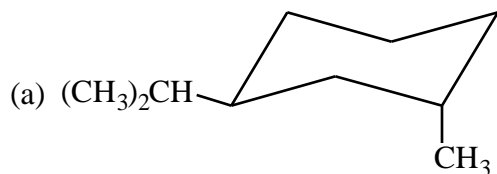
(b) *cis*-1,4-diethylcyclohexane

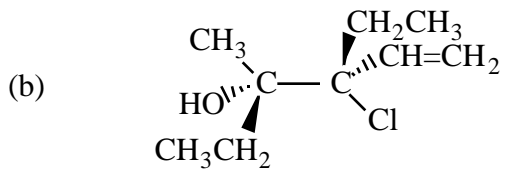


(c) *trans*-1,2-dimethylcyclohexane



7 (12 pts) Assign the **R,S** configuration to each **stereocenter** in the following compound (3 pts each stereocenter):





8. (4 pts) Make a **three-dimensional drawing** of **(R)-2-butanol**:

9. (20, 4 pts each) For each of the following questions (a)-(e) **circle** the item that is the correct answer.

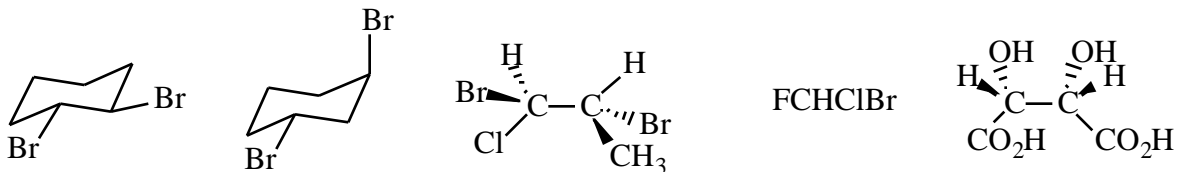
(a) Which one of the following atoms has the ground-state **electron configuration** of  $1s^2 2s^2 2p^3$ ?

C      O      F      N      S      Cl      B      Ne      P

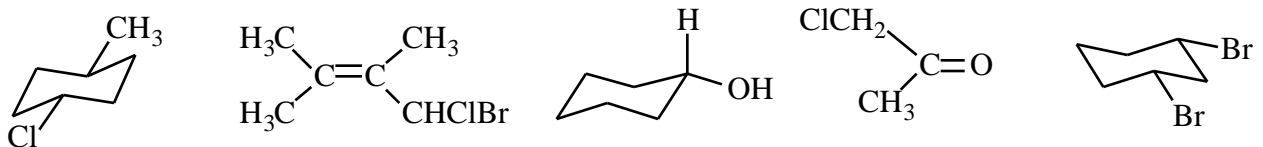
(b) Which one of the following compounds has the **ionic** bond?

CH<sub>3</sub>OH      C<sub>2</sub>H<sub>6</sub>      CH<sub>3</sub>CH<sub>2</sub>ONa      NH<sub>3</sub>      H<sub>2</sub>O      CH<sub>4</sub>

(c) Which one of the following compounds is a **meso** form?



(d) Which one of the following molecules is **chiral**?



(e) Which one of the following compounds has **four** stereoisomers?

2-bromobutane      3,4-dichlorohexane      methylcyclopentane      1,1-dimethylcyclobutane  
 1,4-dichlorocyclohexane      2,3-dibromopentane      1,2-dibromocyclohexane