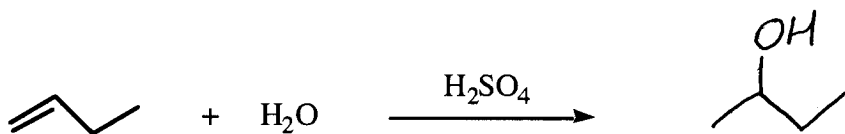
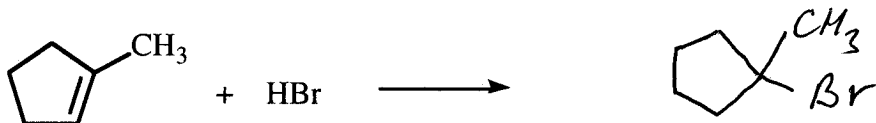


Chemistry 2521; Sample Quiz 5 (Ch. 5 and Ch. 6 to page 223)

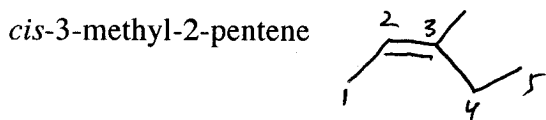
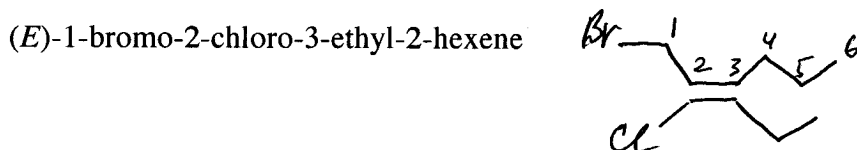

Printed Name (Last, First) \_\_\_\_\_

Key

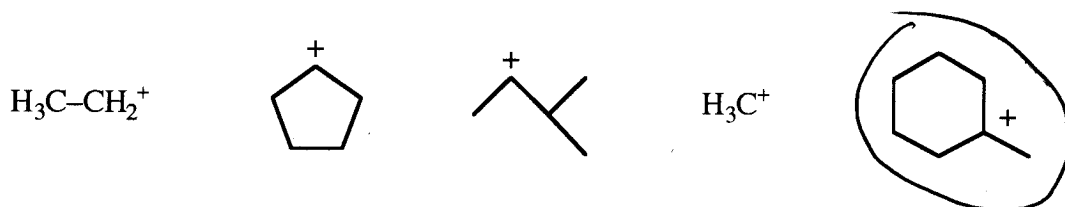
1. (12) Complete the following equations, showing the **stereochemistry** of the product when appropriate:



2. (8) Give the **correct structure** for each of the following compounds (2 pts each):



3. (3) Circle the **most stable carbocation**:



4. (2) Which one of the following compounds is a strong **electrophile**?

